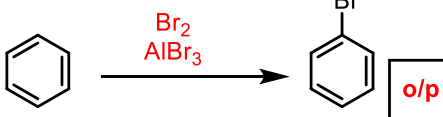
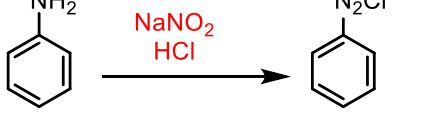

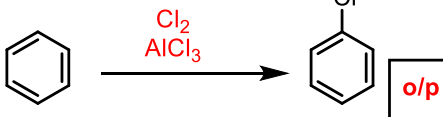
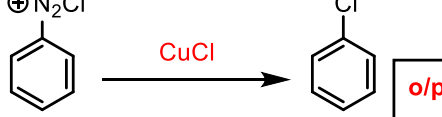
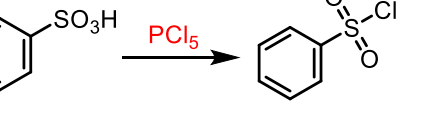

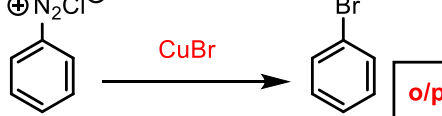
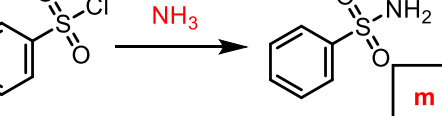
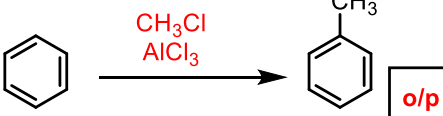
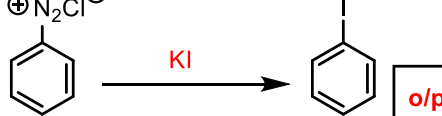
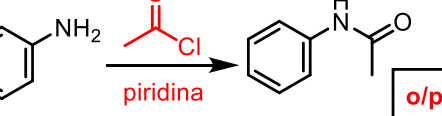

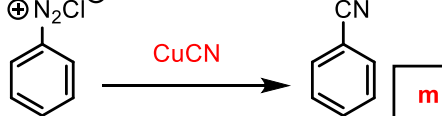
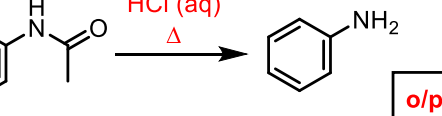
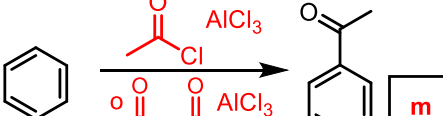
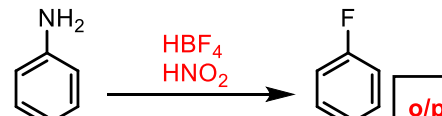
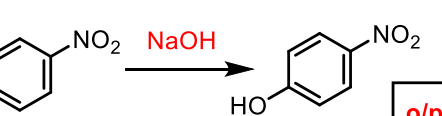
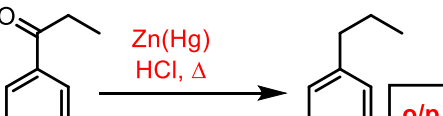
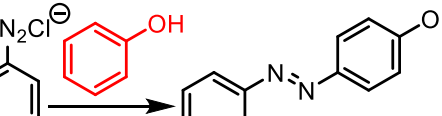
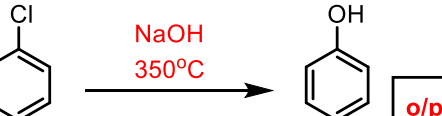
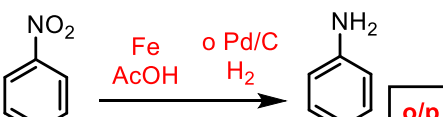
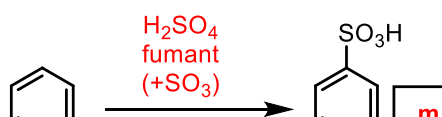
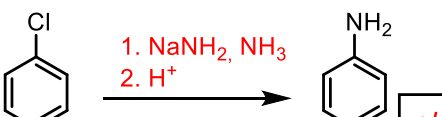


Quins són els reactius necessaris per a les transformacions següents? Indiqueu a la casella si el producte de la reacció dirigeix orto/para o meta

<p>E01)</p>  <p><b>o/p</b></p>	<p>E09)</p>  <p><b>o/p</b></p>	<p>E17)</p>  <p><b>o/p</b></p>
<p>E02)</p>  <p><b>o/p</b></p>	<p>E10)</p>  <p><b>o/p</b></p>	<p>E18)</p>  <p><b>o/p</b></p>
<p>E03)</p>  <p><b>m</b></p>	<p>E11)</p>  <p><b>o/p</b></p>	<p>E19)</p>  <p><b>m</b></p>
<p>E04)</p>  <p><b>o/p</b></p>	<p>E12)</p>  <p><b>o/p</b></p>	<p>E20)</p>  <p><b>o/p</b></p>
<p>E05)</p>  <p><b>m</b></p>	<p>E13)</p>  <p><b>m</b></p>	<p>E21)</p>  <p><b>o/p</b></p>
<p>E06)</p>  <p><b>m</b></p>	<p>E14)</p>  <p><b>o/p</b></p>	<p>E22)</p>  <p><b>o/p</b></p>
<p>E07)</p>  <p><b>o/p</b></p>	<p>E15)</p>  <p><b>o/p</b></p>	<p>E23)</p>  <p><b>o/p</b></p>
<p>E08)</p>  <p><b>o/p</b></p>	<p>E16)</p>  <p><b>m</b></p>	<p>E24)</p>  <p><b>o/p</b></p>